

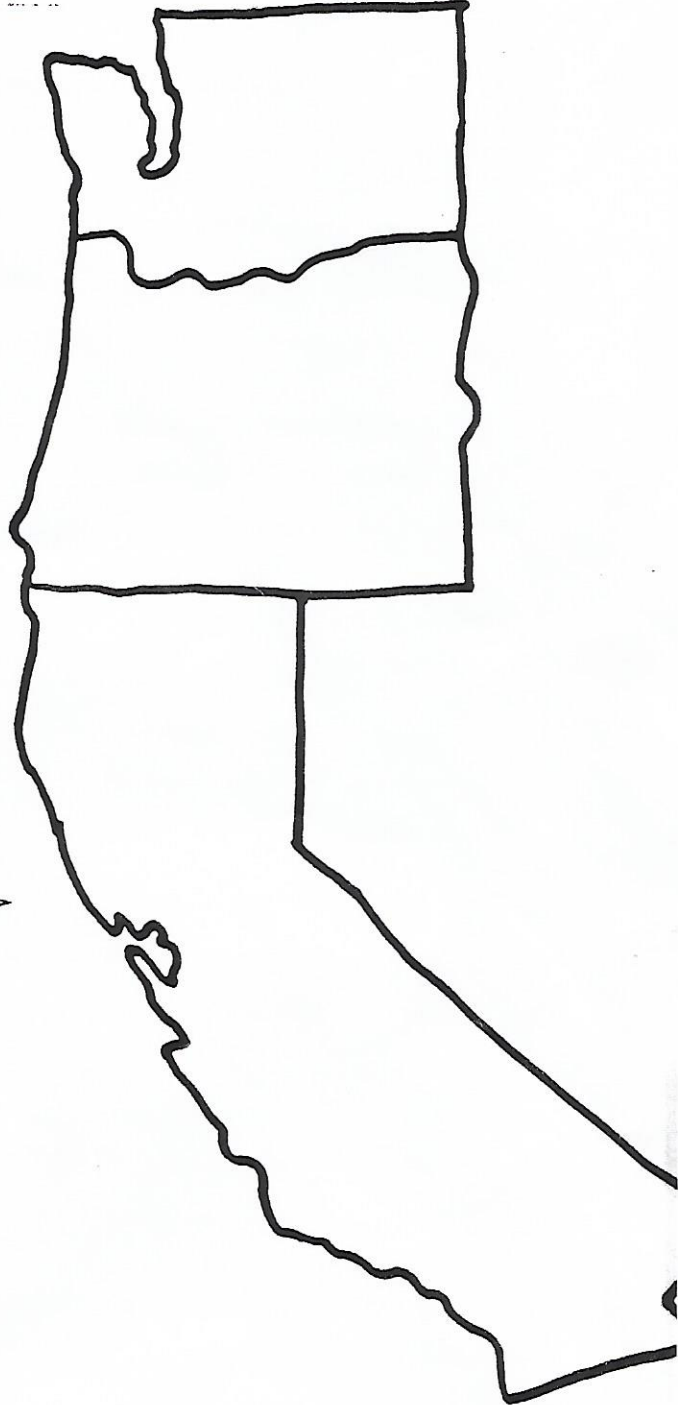
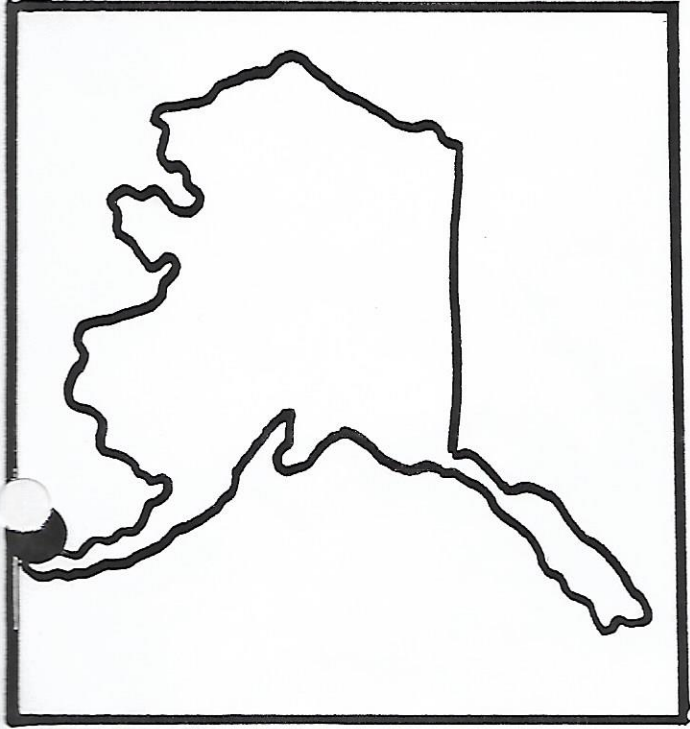


The Pacific Coast Region

Name _____



Name: _____ Wk _____ Day _____ # _____

Activity Sheet for the Pacific States

1. The five Pacific States, in alphabetical order are:

1. _____ 2. _____
3. _____ 4. _____
5. _____

2. If we lived in Oregon, the State of _____ would be north of us, while _____ is to the south.

3. All of the Pacific States touch the same ocean. Its name is the _____ Ocean.

4. Write the names of three states which touch the Pacific States.

1. _____ 2. _____
3. _____

5. Two foreign countries touch the United States.

The country to the north is _____ and the country to the south is _____.

6. Write the names of the capital cities of each of the following states.

- _____, California
_____, Hawaii
_____, Oregon
_____, Alaska
_____, Washington

7. Two large rivers flow through central California. Look in an encyclopedia or atlas and find their names. They are called the _____ River and the _____ River.

8. A large river separates a part of the State of Washington and the State of Oregon. Its name is the _____ River.

9. Of the five states in the Pacific State Group, _____ is the largest and _____ is the smallest.